






Ecris le nombre d'objets de plusieurs façons.


 ×
 ×

 ×
 ×

 ×
 ×


 ×
 ×

 ×
 ×


 ×
 ×

Colorie.


3×8



5×7



4×9



Ecris les additions sous forme de multiplication.


$9 + 9 + 9 + 9 + 9 + 9 = \dots \times \dots$


$6 + 6 + 6 + 6 + 6 = \dots \times \dots$


$5 + 5 + 5 + 5 + 5 + 5 + 5 + 5 + 5 + 5 + 5 = \dots \times \dots$

$2 + 2 + 2 + 2 + 2 + 2 + 2 + 2 = \dots \times \dots$


Ecris le nombre d'objets de plusieurs façons.


 ×
 ×

 ×
 ×

 ×
 ×


 ×
 ×

 ×
 ×


 ×
 ×

Colorie.


3×8



5×7



4×9



Ecris les additions sous forme de multiplication.

$9 + 9 + 9 + 9 + 9 + 9 = \dots \times \dots$

$6 + 6 + 6 + 6 + 6 = \dots \times \dots$

$5 + 5 + 5 + 5 + 5 + 5 + 5 + 5 + 5 + 5 + 5 = \dots \times \dots$

$2 + 2 + 2 + 2 + 2 + 2 + 2 + 2 = \dots \times \dots$